



NAME \_\_\_\_\_

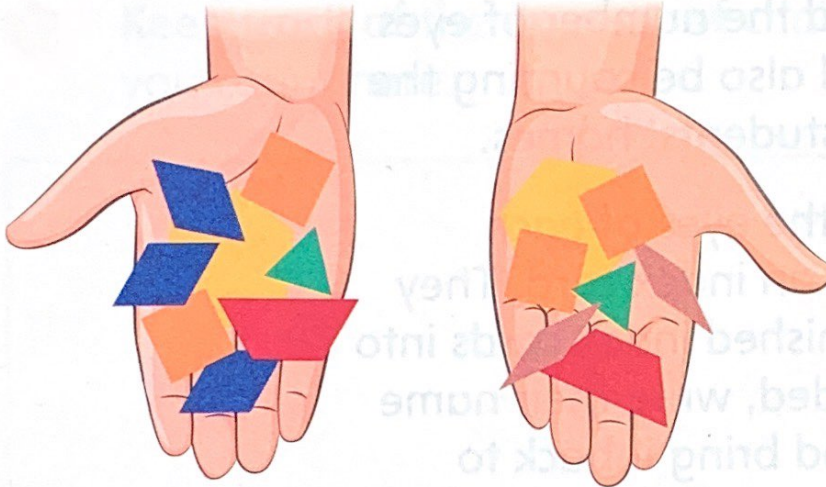
DATE \_\_\_\_\_

DATE \_\_\_\_\_

NAME \_\_\_\_\_






# How Many Pattern Blocks?

Mia grabbed two handfuls of blocks



1

How many of each block did Mia grab?

Shape					
How Many?					

2

Put the numbers in order:

\_\_\_\_\_

3

How many did Mia grab in all? \_\_\_\_\_

## NOTE

Students practice counting objects and writing numbers.

**MWI** Ordering Fewest to Most